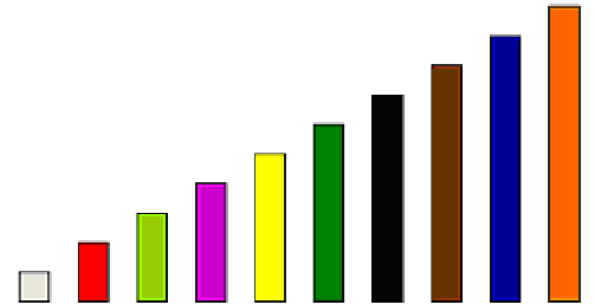


Cuisenaire Doubles




Materials: cuisenaire rods


1. Explore the cuisenaire rods. How many different single rods can you make using doubles of another?

Example:

$$4 + 4 = 8$$



$$8 - 4 = 4$$



2. Draw a picture to show the rods you used.
3. Write an addition and a subtraction doubles fact for each set of rods.
4. What other doubles facts can you represent using cuisenaire rods?