


YO HO HO

Missing Numbers



*By Teach With Laughter
Graphics by letteringdelights*

1

$$12 + \underline{\quad} = 23$$



2

$$8 + \underline{\quad} = 17$$



3

$$13 + \underline{\quad} = 25$$



4

$$16 + \underline{\quad} = 30$$



5

$$15 + \underline{\quad} = 28$$



6

$$19 + \underline{\quad} = 29$$



7

$$12 + \underline{\quad} = 27$$



8

$$8 + \underline{\quad} = 26$$



9

$$18 + \underline{\quad} = 23$$



10

$$17 + \underline{\quad} = 24$$



11




$$13 + \underline{\quad} = 21$$






12

$$22 + \underline{\quad} = 28$$







Directions:

Match the missing addend number sentence to the missing number.

Optional - record the number sentence on the recording sheet.

Pirate Missing Numbers

Fill in the number sentences.



1. ____ + ____ = ____

2. ____ + ____ = ____

3. ____ + ____ = ____

4. ____ + ____ = ____

5. ____ + ____ = ____

6. ____ + ____ = ____

7. ____ + ____ = ____

8. ____ + ____ = ____

9. ____ + ____ = ____


10. ____ + ____ = ____

11. ____ + ____ = ____

12. ____ + ____ = ____

I can...

1. Choose a card.



2. Find the missing number.



3. Record.

Pirate Missing Numbers	
Fill in the number sentences.	
1. $__ + __ = __$	2. $__ + __ = __$
3. $__ + __ = __$	4. $__ + __ = __$
5. $__ + __ = __$	6. $__ + __ = __$
7. $__ + __ = __$	8. $__ + __ = __$
9. $__ + __ = __$	10. $__ + __ = __$
11. $__ + __ = __$	12. $__ + __ = __$

